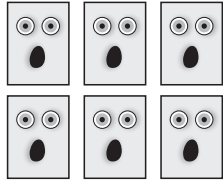



Name: _____

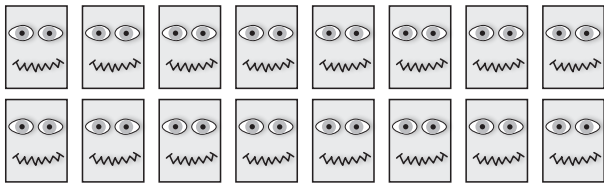
Write the equation for each set.



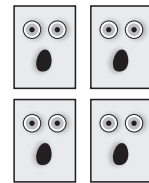
$$\underline{2} \times \underline{\quad} = \underline{\quad}$$




$$\underline{2} \times \underline{\quad} = \underline{\quad}$$



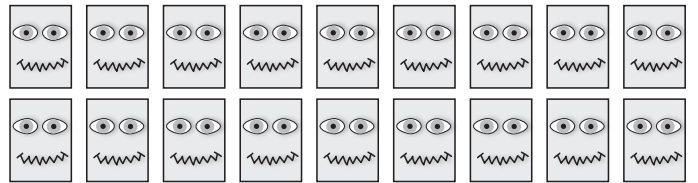
$$\underline{2} \times \underline{\quad} = \underline{\quad}$$



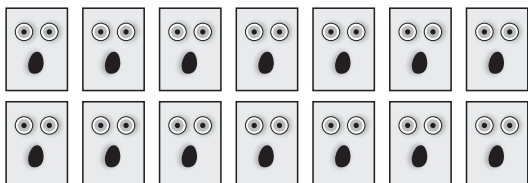
$$\underline{2} \times \underline{\quad} = \underline{\quad}$$




$$\underline{2} \times \underline{\quad} = \underline{\quad}$$



$$\underline{2} \times \underline{\quad} = \underline{\quad}$$



$$\underline{2} \times \underline{\quad} = \underline{\quad}$$



$$\underline{2} \times \underline{\quad} = \underline{\quad}$$