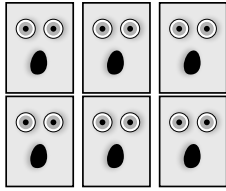



Name: \_\_\_\_\_

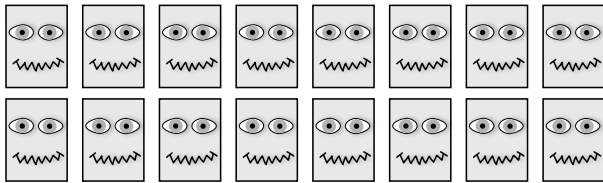
Write the equation for each set.



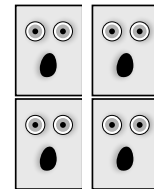
$$\underline{\quad} 2 \times \underline{\quad} = \underline{\quad}$$




$$\underline{\quad} 2 \times \underline{\quad} = \underline{\quad}$$



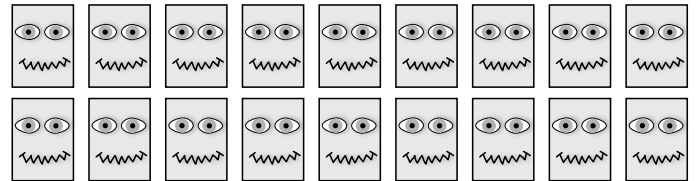
$$\underline{\quad} 2 \times \underline{\quad} = \underline{\quad}$$



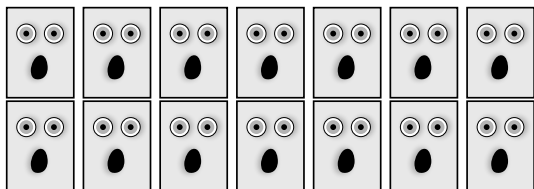
$$\underline{\quad} 2 \times \underline{\quad} = \underline{\quad}$$




$$\underline{\quad} 2 \times \underline{\quad} = \underline{\quad}$$



$$\underline{\quad} 2 \times \underline{\quad} = \underline{\quad}$$



$$\underline{\quad} 2 \times \underline{\quad} = \underline{\quad}$$



$$\underline{\quad} 2 \times \underline{\quad} = \underline{\quad}$$