













Name: _____



Pumpkin Time

Write the equation to match each picture.

 $1 + 1 + 1 = 3$	 ___ + ___ + ___ = ___	 ___ + ___ + ___ = ___
 ___ + ___ + ___ = ___	 ___ + ___ + ___ = ___	 ___ + ___ + ___ = ___
 ___ + ___ + ___ = ___	 ___ + ___ + ___ = ___	 ___ + ___ + ___ = ___
 ___ + ___ + ___ = ___	 ___ + ___ + ___ = ___	 ___ + ___ + ___ = ___