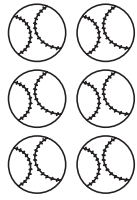


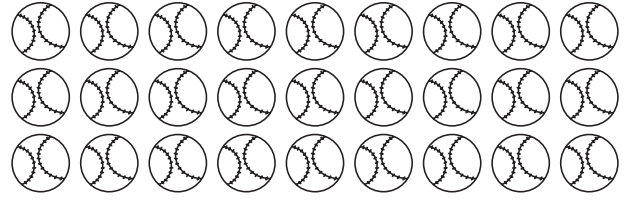
Name: \_\_\_\_\_

3X

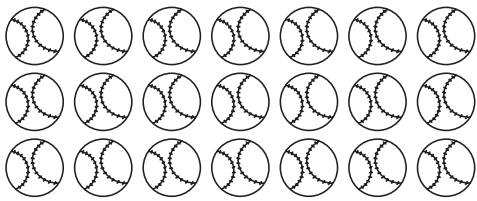
Write the equation for each set.



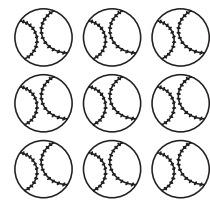
$$\underline{3} \times \underline{2} = \underline{\quad}$$



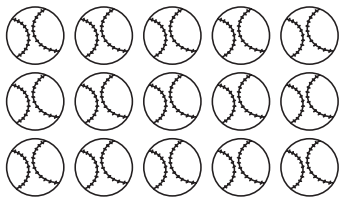
$$\underline{3} \times \underline{10} = \underline{\quad}$$



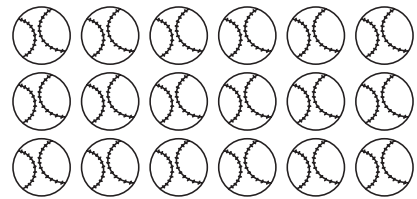
$$\underline{3} \times \underline{7} = \underline{\quad}$$



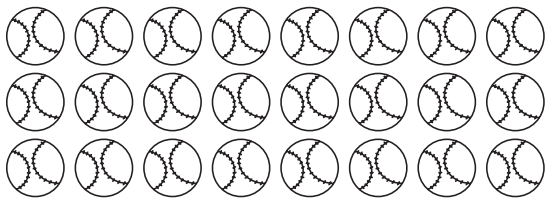
$$\underline{3} \times \underline{3} = \underline{\quad}$$



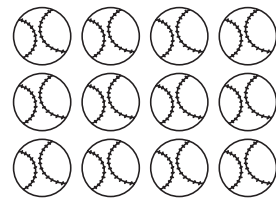
$$\underline{3} \times \underline{5} = \underline{\quad}$$



$$\underline{3} \times \underline{6} = \underline{\quad}$$



$$\underline{3} \times \underline{8} = \underline{\quad}$$



$$\underline{3} \times \underline{4} = \underline{\quad}$$